

Questions & Solutions

PAPER-2 | SUBJECT : CHEMISTRY

PAPER-2 : INSTRUCTIONS TO CANDIDATES

- Question Paper-2 has three (03) parts : Physics, Chemistry and Mathematics.
- Each part has a total of **eighteen (18)** questions divided into three (03) sections (Section-1, Section-2 and Section-3).
- Total number of questions in Question Paper-2 are : **Fifty Four (54)** and Maximum Marks are **One Hundred Ninety Eight (198)**.

Type of Questions and Marking Schemes

SECTION-1 (Maximum Marks: 18)

- This section contains **SIX (06)** questions.
- The answer to each question is a **SINGLE DIGIT INTEGER** ranging from 0 to 9, **BOTH INCLUSIVE**.
- For each question, enter the correct numerical value of the answer using the mouse and the on-screen virtual numeric keypad in the place designated to enter the answer. .
- Answer to each question will be evaluated according to the following marking scheme :
Full Marks : **+3** If **ONLY** the correct numerical value is entered.
Zero Marks : **0** If the question is unanswered.
Negative Marks : **-1** In all other cases.

SECTION 2 (Maximum Marks: 24)

- This section contains **SIX (06)** questions.
- Each question has **FOUR** options **ONE OR MORE THAN ONE** of these four option(s) is(are) correct answer(s).
- For each question, choose the option(s) corresponding to (all) the correct answer(s).
- Answer to each question will be evaluated according to the following marking scheme.
Full Marks : **+4** If only (all) the correct option(s) is (are) chosen.
Partial Marks : **+3** If all the four options are correct but **ONLY** three options are chosen.
Partial Marks : **+2** If three or more options are correct but **ONLY** two options are chosen and both of which are correct.
Partial Marks : **+1** If two or more options are correct but **ONLY** one option is chosen and it is a correct option.
Zero Marks : **0** If none of the options is chosen (i.e. the question is unanswered).
Negative Marks : **-2** In all other cases.

SECTION 3 (Maximum Marks : 24)

- This section contains **SIX (06)** questions. The answer to each question is a **NUMERICAL VALUE**.
- For each question, enter the correct numerical value of the answer using the mouse and the on-screen virtual numeric keypad in the place designated to enter the answer. If the numerical value has more than two decimal places, **truncate/round-off** the value to **TWO** decimal places.
- Answer to each question will be evaluated according to the following marking scheme :
Full Marks : **+4** If **ONLY** the correct numerical value is entered.
Zero Marks : **0** In all other cases.

CHEMISTRY

SECTION 1 (Maximum Marks : 18)

- This section contains **SIX (06)** questions.
- The answer to each question is a **SINGLE DIGIT INTEGER** ranging from **0 TO 9**. BOTH INCLUSIVE.
- For each question, enter the correct integer corresponding to the answer using the mouse and the on-screen virtual numeric keypad in the place designated to enter the answer.
- Answer to each question will be evaluated according to the following marking scheme:
Full Marks : **+3** If **ONLY** the correct integer is entered:
Zero Marks : **0** If the question is unanswered;
Negative Marks : **-1** In all other cases.

1. The 1st, 2nd, and the 3rd ionization enthalpies, I_1 , I_2 , and I_3 , of four atoms with atomic numbers n , $n + 1$, $n + 2$, and $n + 3$, where $n < 10$, are tabulated below. What is the value of n ?

Atomic number	Ionization Enthalpy (kJ/mol)		
	I_1	I_2	I_3
n	1681	3374	6050
$n + 1$	2081	3952	6122
$n + 2$	496	4562	6910
$n + 3$	738	1451	7733

Ans. (9)

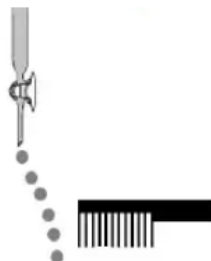
Sol. From given data $(n+2)$ atom is alkali metal which is sodium.

As $n + 2 = 11$ so $n = 9$

2. Consider the following compounds in the liquid form:

O_2 , HF, H_2O , NH_3 , H_2O_2 , CCl_4 , $CHCl_3$, C_6H_6 , C_6H_5Cl .

When a charged comb is brought near their flowing stream, how many of them show deflection as per the following figure?



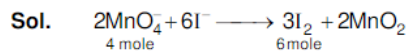
Ans. (6)

Sol. Polar compound show deflection by charged comb

So HF, H_2O , NH_3 , H_2O_2 , $CHCl_3$, C_6H_5Cl shows deflection by charged comb.

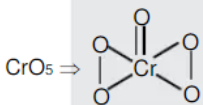
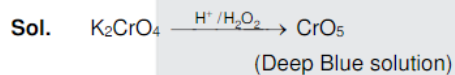
3. In the chemical reaction between stoichiometric quantities of KMnO_4 and KI in weakly basic solution, what is the number of moles of I_2 released for 4 moles of KMnO_4 consumed?

Ans. (6)



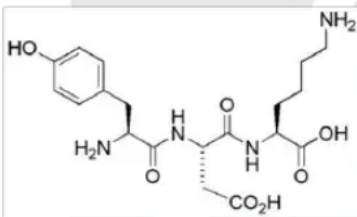
4. An acidified solution of potassium chromate was layered with an equal volume of amyl alcohol. When it was shaken after the addition of 1 mL of 3% H_2O_2 , a blue alcohol layer was obtained. The blue color is due to the formation of a chromium (VI) compound 'X'. What is the number of oxygen atoms bonded to chromium through only single bonds in a molecule of X?

Ans. (4)



No. of oxygen atom bonded with chromium with single bond is (4)

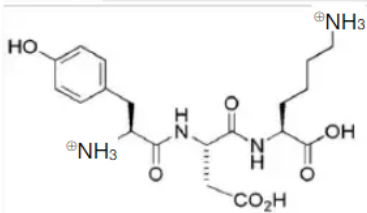
5. The structure of a peptide is given below.



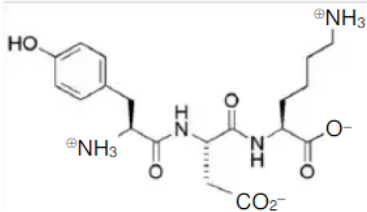
If the absolute values of the net charge of the peptide at pH = 2, pH = 6, and pH = 11 are $|z_1|$, $|z_2|$, and $|z_3|$, respectively, then what is $|z_1| + |z_2| + |z_3|$?

Ans. (5)

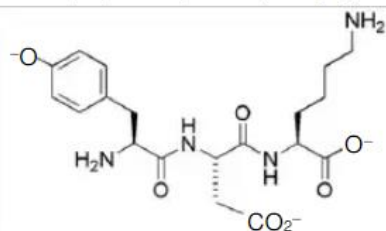
Sol. The structure of tripeptide will be as followed at PH = 2 (in highly acidic medium)



hence $|z_1| = 2$ at pH = 6 (in approximately neutral solution it will be



Hence $|z_2| = 0$ at pH = 11 (in highly basic medium) the structure will be



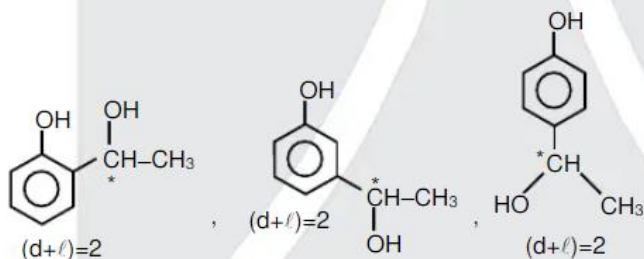
Hence $|z_3|$ will be 3.

Therefore $|z_1| + |z_2| + |z_3| = 2 + 0 + 3 = 5$

6. An organic compound ($C_8H_{10}O_2$) rotates plane-polarized light. It produces pink color with neutral $FeCl_3$ solution. What is the total number of all the possible isomers for this compound?

Ans. (6)

Sol. Since compound $C_8H_{10}O_2$ corresponds positively to neutral $FeCl_3$ hence it will be a phenolic compound the possible structures which are optically active are as followed



hence total optically active isomers will be 6.

SECTION 1 (Maximum Marks : 24)

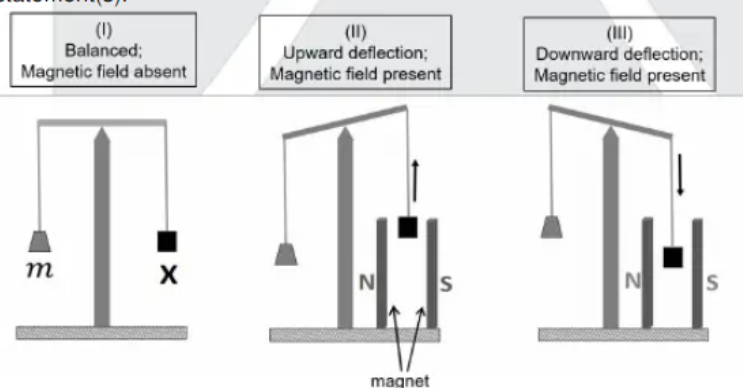
- This section contains **SIX (06)** questions.
- Each question has **FOUR** options **ONE OR MORE THAN ONE** of these four option(s) is(are) correct answer(s).
- For each question, choose the option(s) corresponding to (all) the correct answer(s).
- Answer to each question will be evaluated according to the following marking scheme.

<i>Full Marks</i>	: +4 If only (all) the correct option(s) is (are) chosen.
<i>Partial Marks</i>	: +3 If all the four options are correct but ONLY three options are chosen.
<i>Partial Marks</i>	: +2 If three or more options are correct but ONLY two options are chosen and both of which are correct.
<i>Partial Marks</i>	: +1 If two or more options are correct but ONLY one option is chosen and it is a correct option.
<i>Zero Marks</i>	: 0 If none of the options is chosen (i.e. the question is unanswered).
<i>Negative Marks</i>	: -1 In all other cases.

खंड 1 (अधिकतम अंक: 24)

- इस खंड में **छः (06)** प्रश्न हैं।
- प्रत्येक प्रश्न के लिए चार विकल्प दिए गए हैं। इन चार विकल्पों में से **एक या एक से अधिक** विकल्प सही हैं।
- प्रत्येक प्रश्न के लिए, दिए हुए विकल्पों में से सही उत्तर (उत्तरों) से संबंधित विकल्प (विकल्पों) को चुनिए।
- प्रत्येक प्रश्न के उत्तर का मूल्यांकन निम्न योजना के अनुसार होगा :
 पूर्ण अंक : **+4** यदि केवल (सारे) सही विकल्प (विकल्पों) को चुना गया है।
 आंशिक अंक : **+3** यदि चारों विकल्प सही हैं परन्तु केवल तीन विकल्पों को चुना गया है।
 आंशिक अंक : **+2** यदि तीन या तीन से अधिक विकल्प सही हैं परन्तु केवल दो विकल्पों को चुना गया है और दो चुने हुए विकल्प सही विकल्प हैं।
 आंशिक अंक : **+1** यदि दो या दो से अधिक विकल्प सही हैं परन्तु केवल एक विकल्प को चुना गया है और चुना हुआ विकल्प सही विकल्प है।
 शून्य अंक : **0** यदि किसी भी विकल्प को नहीं चुना गया है (अर्थात् प्रश्न अनुत्तरित है)।
 ऋण अंक : **-1** अन्य सभी परिस्थितियों में।

7. In an experiment, m grams of a compound **X** (gas/liquid/solid) taken in a container is loaded in a balance as shown in figure I below. In the presence of a magnetic field, the pan with **X** is either deflected upwards (figure II), or deflected downwards (figure III), depending on the compound **X**. Identify the correct statement(s).



- (A) If **X** is $\text{H}_2\text{O}(l)$, deflection of the pan is upwards.
 (B) If **X** is $\text{K}_4[\text{Fe}(\text{CN})_6](s)$, deflection of the pan is upwards.
 (C) If **X** is $\text{O}_2(g)$, deflection of the pan is downwards.
 (D) If **X** is $\text{C}_6\text{H}_6(l)$, deflection of the pan is downwards

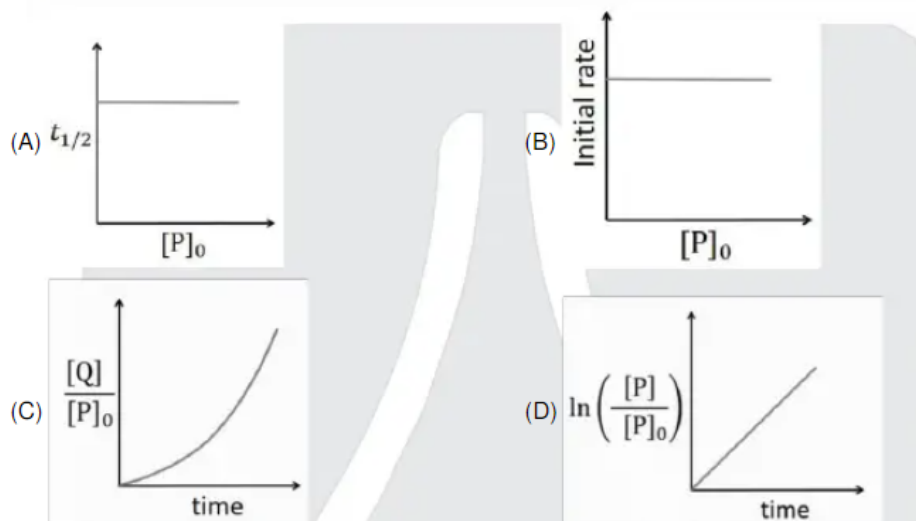
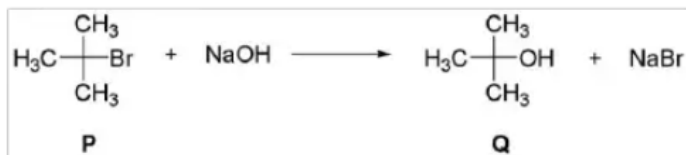
Ans. (ABC)

Sol. Paramagnetic substance attracted by magnetic field so magnetic balance show downward deflection. While diamagnetic substance show repulsion in magnetic field show magnetic balance show upward deflection

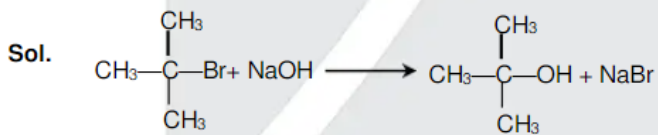
	Compound	Magnetic Nature	Deflection
(a)	H_2O	Diamagnetic	Upward
(b)	$\text{K}_4[\text{Fe}(\text{CN})_6]$	Diamagnetic	Upward
(c)	$\text{O}_2(g)$	Paramagnetic	Downward
(d)	C_6H_6	Diamagnetic	Upward

8. Which of the following plots is(are) correct for the given reaction?

([P]₀ is the initial concentration of P)



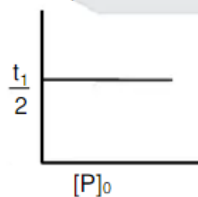
Ans. (A)



this is 1st order reaction

$$\text{For 1}^{\text{st}} \text{ order } T_{1/2} = \frac{0.693}{k}$$

So independent of initial concentration



$$C = C_0 e^{-kt} \Rightarrow \ln\left[\frac{C}{C_0}\right] = -kt$$

$$\Rightarrow \ln\left[\frac{[P]}{[P]_0}\right] = -kt$$

So graph D is incorrect.

9. Which among the following statement(s) is(are) true for the extraction of aluminium from bauxite?

- (A) Hydrated Al_2O_3 precipitates, when CO_2 is bubbled through a solution of sodium aluminate.
 (B) Addition of Na_3AlF_6 lowers the melting point of alumina.
 (C) CO_2 is evolved at the anode during electrolysis.
 (D) The cathode is a steel vessel with a lining of carbon.

Ans. (ABCD)

Sol. (A) $2\text{NaAlO}_2 + 3\text{H}_2\text{O} + \text{CO}_2 \longrightarrow 2\text{Al}(\text{OH})_3 + \text{Na}_2\text{CO}_3$

(B) In Hall-Heroult process Na_3AlF_6 and CaF_2 is mixed with Al_2O_3 to lower melting point & increase conductivity.

(C) Anode $\text{C}(\text{s}) + 2\text{O}^{2-}(\text{melt}) \longrightarrow \text{CO}_2(\text{g}) + 4\text{e}^-$

(D) Steel cathode with carbon lining & graphite anode are used.

10. Choose the correct statement(s) among the following.

- (A) $\text{SnCl}_2 \cdot 2\text{H}_2\text{O}$ is a reducing agent.
 (B) SnO_2 reacts with KOH to form $\text{K}_2[\text{Sn}(\text{OH})_6]$.
 (C) A solution of PbCl_2 in HCl contains Pb^{2+} and Cl^- ions.
 (D) The reaction of Pb_3O_4 with hot dilute nitric acid to give PbO_2 is a redox reaction.

Ans. (AB)

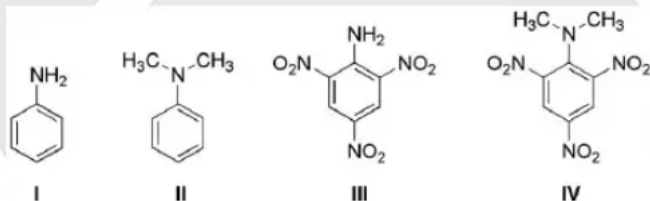
Sol. (A) Sn^{2+} is a good reducing agent which gets oxidise into Sn^{4+}

(B) Amphoteric nature.

(C) $\text{PbCl}_2 + 2\text{Cl}^- \longrightarrow [\text{PbCl}_4]^{2-}$

(D) $\text{Pb}_3\text{O}_4 + 4\text{HNO}_3 \longrightarrow \text{PbO}_2 \downarrow + 2\text{Pb}(\text{NO}_3)_2 + 6\text{H}_2\text{O}$
(2PbO + PbO₂) (Conc.)

11. Consider the following four compounds I, II, III, and IV.



Choose the correct statement(s).

- (A) The order of basicity is $\text{II} > \text{I} > \text{III} > \text{IV}$.
 (B) The magnitude of pK_b difference between I and II is more than that between III and IV.
 (C) Resonance effect is more in III than in IV.
 (D) Steric effect makes compound IV more basic than III

Ans. (CD)

Sol. The correct basic strength order is

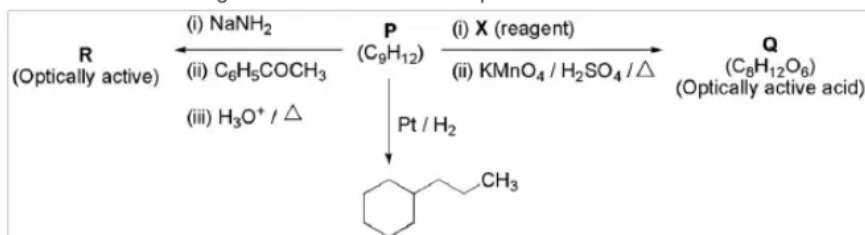
(A) $\text{K}_b : (\text{IV}) > (\text{II}) > (\text{I}) > (\text{III})$;

- (IV) is strongest base due to SIR effect.
- (III) is weakest base due to $-\text{M}$ group of three nitro groups present at Ortho and Para positions.
- (II) is stronger than (I) since (II) is tertiary and (I) primary aromatic amine.

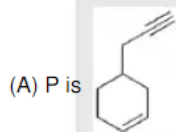
(B) IV is found to be 40,000 times more basic than III. While I & II differ very little in basic strength.

(C,D) Due to SIR effect in (IV) both $-\text{NO}_2$ and $-\text{N}(\text{CH}_3)_2$ will be out of plane hence resonance effect is more in III than in IV.

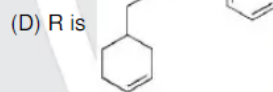
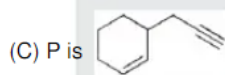
12. Consider the following transformations of a compound P.



Choose the correct option(s)

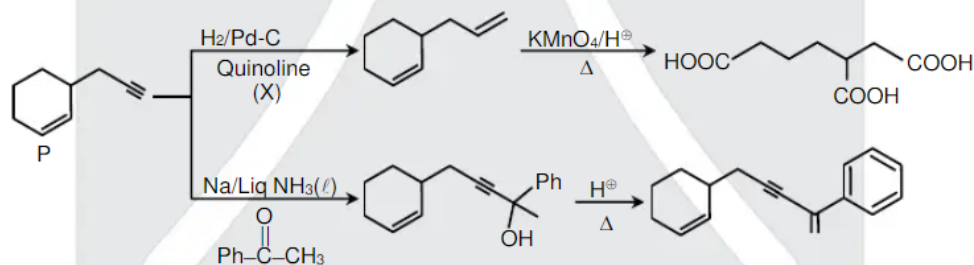


(B) X is Pd-C/quinoline/H₂



Ans. (BC)

Sol.



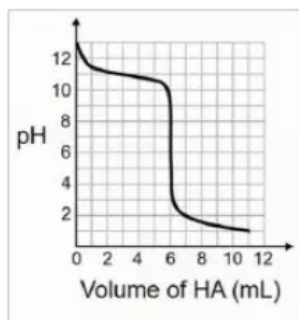
SECTION 3 (Maximum Marks : 24)

- This section contains **SIX (06)** questions. The answer to each question is a **NUMERICAL VALUE**.
- For each question, enter the correct numerical value of the answer using the mouse and the on-screen virtual numeric keypad in the place designated to enter the answer. If the numerical value has more than two decimal places, **truncate/round-off** the value to **TWO** decimal places.
- Answer to each question will be evaluated according to the following marking scheme :
 Full Marks : **+4** If **ONLY** the correct numerical value is entered.
 Zero Marks : **0** In all other cases.

खंड 3 (अधिकतम अंक: 24)


- इस खंड में **छः (06)** प्रश्न हैं। प्रत्येक प्रश्न का उत्तर एक संख्यात्मक मान (**NUMERICAL VALUE**) है।
- प्रत्येक प्रश्न के उत्तर के सही संख्यात्मक मान को माउज़ (mouse) और ऑन-स्क्रीन (on-screen) वर्चुअल न्यूमेरिक कीपैड (virtual numeric keypad) के प्रयोग से उत्तर के लिए चिह्नित स्थान पर दर्ज करें। यदि संख्यात्मक मान में दो से अधिक दशमलव स्थान हैं, तो संख्यात्मक मान को दशमलव के दो स्थानों तक **ट्रंकेट/राउंड ऑफ (truncate/round-off)** करें।
- प्रत्येक प्रश्न के उत्तर का मूल्यांकन निम्न योजना के अनुसार होगा :-
 पूर्ण अंक : **+3** यदि दर्ज किया गया संख्यात्मक मान (**Numerical value**) ही सही उत्तर है।
 शून्य अंक : **0** अन्य सभी परिस्थितियों में।

13. A solution of 0.1 M weak base (B) is titrated with 0.1 M of a strong acid (HA). The variation of pH of the solution with the volume of HA added is shown in the figure below. What is the pK_b of the base? The neutralization reaction is given by $B + HA \rightarrow BH^+ + A^-$.



Ans. (03.00)

Sol. At 3 ml pH of solution is 11



at 3 ml best buffer action is shown

So $P_{OH} = P_{K_b} = 3$ (As basic buffer is formed)

So $P_{K_b} = 3$

14. Liquids **A** and **B** form ideal solution for all compositions of **A** and **B** at 25 °C. Two such solutions with 0.25 and 0.50 mole fractions of **A** have the total vapor pressures of 0.3 and 0.4 bar, respectively. What is the vapor pressure of pure liquid **B** in bar?

Ans. (0.20)

Sol. $P_{Total} = P_A^{\circ}X_A + P_B^{\circ}X_B$

$$(i) 0.3 = (P_A^{\circ})\frac{1}{4} + (P_B^{\circ})\frac{3}{4}$$

$$P_A^{\circ} + P_B^{\circ} = 1.2$$

$$(ii) 0.4 = (P_A^{\circ})\frac{1}{2} + (P_B^{\circ})\frac{1}{2}$$

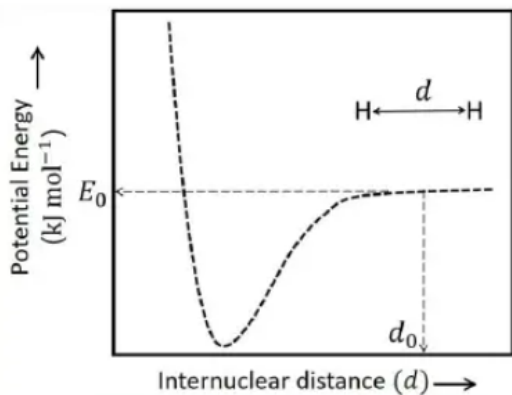
$$P_A^{\circ} + P_B^{\circ} = 0.8$$

From equation (1) and equation (2)

$$P_B^{\circ} = 0.2 \text{ bar and } P_A^{\circ} = 0.6 \text{ bar}$$

15. The figure below is the plot of potential energy versus internuclear distance (d) of H_2 molecule in the electronic ground state. What is the value of the net potential energy E_0 (as indicated in the figure) in kJ mol^{-1} , for $d = d_0$ at which the electron-electron repulsion and the nucleus-nucleus repulsion energies are absent? As reference, the potential energy of H atom is taken as zero when its electron and the nucleus are infinitely far apart.

Use Avogadro constant as $6.023 \times 10^{23} \text{ mol}^{-1}$.



Ans. (5246.5)

Sol. For one H atom

$$\text{P.E.} = \frac{kq_1q_2}{r} = \frac{9 \times 10^9 \times [1.6 \times 10^{-19}]^2}{0.529 \times 10^{-10}}$$

$$= \frac{9 \times 1.6 \times 1.6}{0.529} \times 10^{-19}$$

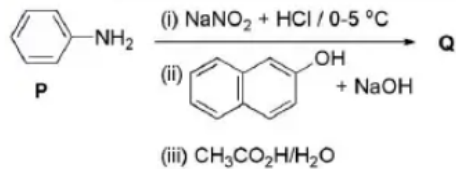
Total potential energy for 2 H-atom (per mole)

$$= \frac{2 \times 9 \times 1.6 \times 1.6}{0.529} \times 10^{-19} \times 6 \times 10^{23}$$

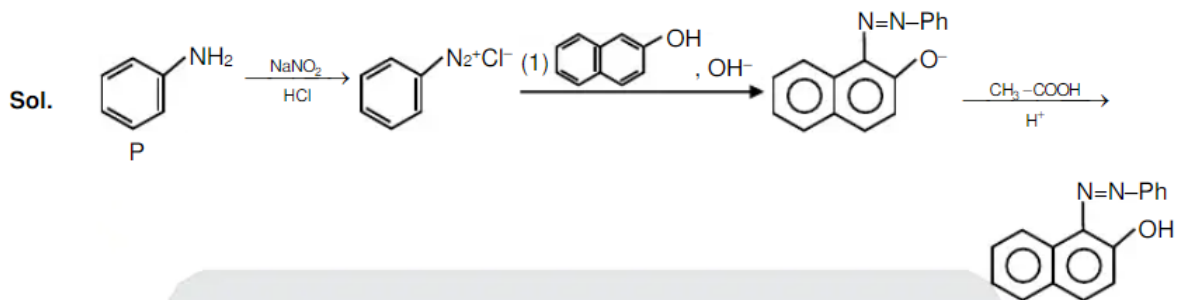
$$= 5246.5 \text{ KJ/mole}$$

Ans. 5246.5

16. Consider the reaction sequence from **P** to **Q** shown below. The overall yield of the major product **Q** from **P** is 75%. What is the amount in grams of **Q** obtained from 9.3 mL of **P**? (Use density of **P** = 1.00 g mL^{-1} ; Molar mass of C = 12.0, H = 1.0, O = 16.0 and N = 14.0 g mol^{-1})



Ans. 18.60



- ⇒ Molar mass of 'P' (C_6H_7N) = 93 g
- ⇒ Mole of 'P' = $\left(\frac{9.3\text{g}}{\text{ml}} \times 1\text{ml}\right) \times \frac{1}{93\text{g}} = 0.1$ mole
- ⇒ Molar mass of 'Q' = 248 g
- ⇒ Mole of 'Q' produced = 0.1 mole
- Mass of 'Q' produced = $(0.1 \times 248 \times 0.75)\text{g} = 18.60$ g

17. Tin is obtained from cassiterite by reduction with coke. Use the data given below to determine the minimum temperature (in K) at which the reduction of cassiterite by coke would take place.

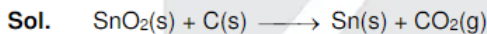
At 298 K: $\Delta_f H^\circ(\text{SnO}_2(\text{s})) = -581.0 \text{ kJ mol}^{-1}$, $\Delta_f H^\circ(\text{CO}_2(\text{g})) = -394.0 \text{ kJ mol}^{-1}$,

$S^\circ(\text{SnO}_2(\text{s})) = 56.0 \text{ J K}^{-1}\text{mol}^{-1}$, $S^\circ(\text{Sn}(\text{s})) = 52.0 \text{ J K}^{-1}\text{mol}^{-1}$,

$S^\circ(\text{C}(\text{s})) = 6.0 \text{ J K}^{-1}\text{mol}^{-1}$, $S^\circ(\text{CO}_2(\text{g})) = 210.0 \text{ J K}^{-1}\text{mol}^{-1}$.

Assume that the enthalpies and the entropies are temperature independent.

Ans. (935)



$$\Delta H_{\text{rxn}}^\circ = \Delta H_f^\circ(\text{CO}_2(\text{g})) - \Delta H_f^\circ(\text{SnO}_2, \text{s})$$

$$= -394.0 - [-581.0]$$

$$= 187 \text{ KJ}$$

$$\Delta S_{\text{rxn}}^\circ = S^\circ(\text{sn}(\text{s})) + S^\circ(\text{CO}_2(\text{g})) - S^\circ(\text{SnO}_2, \text{s}) - S^\circ(\text{C}(\text{s}))$$

$$= 52 + 210 - 56 - 6$$

$$= 200 \text{ J}$$

$$\boxed{\Delta G^\circ = \Delta H^\circ - T\Delta S^\circ}$$

For reaction to be spontaneous

$$\Delta G^\circ < 0$$

$$\Delta H^\circ - T\Delta S^\circ < 0$$

$$187 \times 1000 - T \times 200 < 0$$

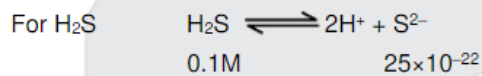
$$\boxed{T > 935\text{K}}$$

18. An acidified solution of 0.05 M Zn^{2+} is saturated with 0.1 M H_2S . What is the minimum molar concentration (M) of H^+ required to prevent the precipitation of ZnS? Use $K_{\text{sp}}(\text{ZnS}) = 1.25 \times 10^{-22}$ and overall dissociation constant of H_2S , $K_{\text{NET}} = K_1K_2 = 1 \times 10^{-21}$.

Ans. (0.2)

Sol. For ZnS $K_{\text{sp}}(\text{ZnS}) = [\text{Zn}^{2+}] \times [\text{S}^{2-}] = 1.25 \times 10^{-22}$
 $= 0.05 \times [\text{S}^{2-}] = 1.25 \times 10^{-22}$

$$[\text{S}^{2-}] = 25 \times 10^{-22}$$



$$K_a = \frac{[\text{H}^+]^2 [\text{S}^{2-}]}{[\text{H}_2\text{S}]} = 1 \times 10^{-21}$$
$$= \frac{[\text{H}^+]^2 \times 25 \times 10^{-22}}{0.1} = 1 \times 10^{-21}$$

$$[\text{H}^+]^2 = \frac{1}{25}$$

$$[\text{H}^+] = \frac{1}{5}$$

$$[\text{H}^+] = 0.2 \text{ M}$$